

# Math

## 27 QUESTIONS

### DIRECTIONS

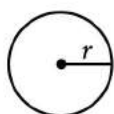
The questions in this section address a number of important math skills. Use of a calculator is permitted for all questions.

### NOTES

Unless otherwise indicated:


- All variables and expressions represent real numbers.
- Figures provided are drawn to scale.
- All figures lie in a plane.
- The domain of a given function  $f$  is the set of all real numbers  $x$  for which  $f(x)$  is a real number.

### REFERENCE

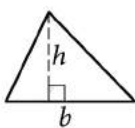


$$A = \pi r^2$$

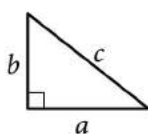
$$C = 2\pi r$$



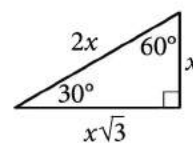
$$A = \ell w$$



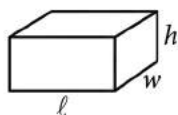
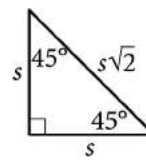
$$A = \frac{1}{2}bh$$




$$c^2 = a^2 + b^2$$



Special Right Triangles



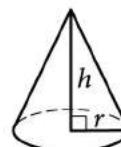
$$V = \ell wh$$



$$V = \pi r^2 h$$



$$V = \frac{4}{3}\pi r^3$$



$$V = \frac{1}{3}\pi r^2 h$$



$$V = \frac{1}{3}\ell wh$$

The number of degrees of arc in a circle is 360.

The number of radians of arc in a circle is  $2\pi$ .

The sum of the measures in degrees of the angles of a triangle is 180.

**For multiple-choice questions**, solve each problem, choose the correct answer from the choices provided, and then circle your answer in this book. Circle only one answer for each question. If you change your mind, completely erase the circle. You will not get credit for questions with more than one answer circled, or for questions with no answers circled.

**For student-produced response questions**, solve each problem and write your answer next to or under the question in the test book as described below.

- Once you've written your answer, circle it clearly. You will not receive credit for anything written outside the circle, or for any questions with more than one circled answer.
- If you find **more than one correct answer**, write and circle only one answer.
- Your answer can be up to 5 characters for a **positive** answer and up to 6 characters (including the negative sign) for a **negative** answer, but no more.
- If your answer is a **fraction** that is too long (over 5 characters for positive, 6 characters for negative), write the decimal equivalent.
- If your answer is a **decimal** that is too long (over 5 characters for positive, 6 characters for negative), truncate it or round at the fourth digit.
- If your answer is a **mixed number** (such as  $3\frac{1}{2}$ ), write it as an improper fraction ( $\frac{7}{2}$ ) or its decimal equivalent (3.5).
- Don't include **symbols** such as a percent sign, comma, or dollar sign in your circled answer.

1

The table summarizes the UV index value recorded by a research assistant at noon each day for 49 days.

UV index	Number of days
1	9
2	15
3	12
4	13

According to the table, a UV index value of 1 was recorded on how many days?

- A) 4
- B) 9
- C) 40
- D) 49

2

To make a bookcase, a woodworker charged a onetime fee plus \$17 per hour worked. The equation  $17h+45=164$  represents this situation, where  $h$  is the number of hours worked. Which of the following is the best interpretation of 164 in this context?

- A) The onetime fee, in dollars
- B) The number of hours worked
- C) The charge per hour, in dollars
- D) The total charge, in dollars

3

In December 2017, the lowest temperature recorded in a certain city was 40 degrees Fahrenheit ( $^{\circ}\text{F}$ ) and the highest temperature recorded was  $90^{\circ}\text{F}$ . Which inequality is true for all values of  $t$ , where  $t$  represents any temperature, in  $^{\circ}\text{F}$ , recorded in the city in December 2017?

- A)  $40 \leq t \leq 90$
- B)  $t \leq 40$
- C)  $t \leq 50$
- D)  $t \geq 90$

4

The function  $f$  is defined by  $f(x)=6(2x+4)$ . For what value of  $x$  does  $f(x)=48$ ?

- A) 2
- B) 6
- C) 8
- D) 22

5

- If your answer is a fraction that doesn't fit in the provided space, enter the decimal equivalent.
- If your answer is a decimal that doesn't fit in the provided space, enter it by truncating or rounding at the fourth digit.
- If your answer is a mixed number (such as  $3\frac{1}{2}$ ), enter it as an improper fraction ( $7/2$ ) or its decimal equivalent(3.5).
- Don't enter symbols such as a percent sign, comma, or dollar sign.

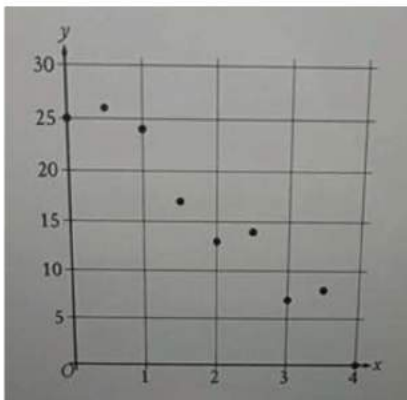
Answer	Acceptable ways to enter answer	Unacceptable: will NOT receive credit
	3.5	
3.5	3.50	31/2
	$\frac{2}{7}$	3 1/2
	$\frac{2}{3}$	0.66
$\frac{2}{3}$	.6666	.66
	.6667	0.67
	0.666	.67
	0.667	
$-\frac{1}{3}$	-1/3	-.33
	-.3333	-0.33
	-0.333	

The ratio of green tiles to blue tiles in a piece of artwork is 5 to 2. If there are 16 blue tiles in the piece of artwork, how many green tiles are there?

Answer : \_\_\_\_

6

The scatterplot shows the relationship between two variables,  $x$  and  $y$ .



Which of the following equations is the most appropriate linear model for the data shown?

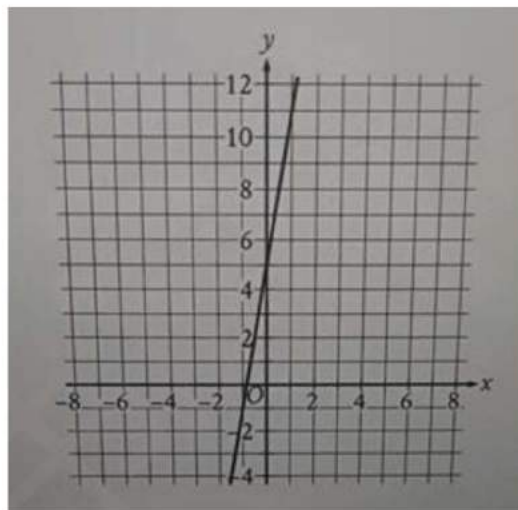
- A)  $y = -6 + 28x$
- B)  $y = 6 - 28x$
- C)  $y = 28 + 6x$
- D)  $y = 28 - 6x$

7

A scientist analyzed a soil sample with a mass of 900 grams and determined that it contained 189 grams of water. What is the percentage of water, by mass, in this soil sample?

- A) 9%
- B) 9.9%
- C) 18.9%
- D) 21%

8



Line  $n$  is shown in the  $xy$ -plane. Line  $k$  (not shown) is perpendicular to line  $n$ . What is the slope of line  $k$ ?

- A)  $-1/5$
- B)  $-1/6$
- C) 5
- D) 6

9

- If your answer is a fraction that doesn't fit in the provided space, enter the decimal equivalent.
- If your answer is a decimal that doesn't fit in the provided space, enter it by truncating or rounding at the fourth digit.
- If your answer is a mixed number (such as  $3\frac{1}{2}$ ), enter it as an improper fraction ( $7/2$ ) or its decimal equivalent(3.5).
- Don't enter symbols such as a percent sign, comma, or dollar sign.

Answer	Acceptable ways to enter answer	Unacceptable: will NOT receive credit
3.5	3.5	
	3.50	31/2
	$\frac{2}{7}$	3 1/2
$\frac{2}{3}$	2/3	0.66
	.6666	.66
	.6667	0.67
	0.666	.67
	0.667	
$-\frac{1}{3}$	-1/3	-.33
	-.3333	-0.33
	-0.333	

$$mx + ky = -83$$

$$2x + ky = 22$$

In the given system of equations,  $m$  and  $k$  are constants. The graphs of these equations in the  $xy$ -plane intersect at the point  $(5, y)$ . What is the value of  $m$ ?

Answer:

10

- If your answer is a fraction that doesn't fit in the provided space, enter the decimal equivalent.
- If your answer is a decimal that doesn't fit in the provided space, enter it by truncating or rounding at the fourth digit.
- If your answer is a mixed number (such as  $3\frac{1}{2}$ ), enter it as an improper fraction ( $7/2$ ) or its decimal equivalent(3.5).
- Don't enter symbols such as a percent sign, comma, or dollar sign.

Answer	Acceptable ways to enter answer	Unacceptable: will NOT receive credit
3.5	3.5	
	3.50	31/2
	$\frac{2}{7}$	3 1/2
$\frac{2}{3}$	2/3	0.66
	.6666	.66
	.6667	0.67
	0.666	.67
	0.667	
$-\frac{1}{3}$	-1/3	-.33
	-.3333	-0.33
	-0.333	

For the linear function  $f$ , the graph of  $y = f(x)$  in the  $xy$ -plane passes through the points  $(0, 2)$  and  $(3, 3)$ . What is the slope of  $y = f(x)$ ?

Answer: 1/3

11

- If your answer is a fraction that doesn't fit in the provided space, enter the decimal equivalent.
- If your answer is a decimal that doesn't fit in the provided space, enter it by truncating or rounding at the fourth digit.
- If your answer is a mixed number (such as  $3\frac{1}{2}$ ), enter it as an improper fraction ( $7/2$ ) or its decimal equivalent (3.5).
- Don't enter symbols such as a percent sign, comma, or dollar sign.

Answer	Acceptable ways to enter answer	Unacceptable: will NOT receive credit
3.5	3.5 $2\frac{7}{10}$	$31/2$ $3\ 1/2$
$\frac{2}{3}$	$2/3$ .6666 .6667 0.666 0.667	0.66 .66 0.67 .67
$-\frac{1}{3}$	-1/3 -.3333 -0.333	-.33 -0.33

A certain book has 250 pages, and 21 of these pages have an illustration. If one of the book's pages is selected at random, what is the probability of selecting a page with an illustration? (Express your answer as a decimal of fraction, not as a percent.)

Answer :

12

$$b^2 + 5c = 9d$$

The given equation relates the real numbers  $b$ ,  $c$ , and  $d$ , where  $d > 5/9c$ . Which equation correctly expresses  $b$  in terms of  $c$  and  $d$ ?

- A)  $b = \frac{9d + 5c}{2}$
- B)  $b = \frac{9d - 5c}{2}$
- C)  $b = \pm\sqrt{9d + 5c}$
- D)  $b = \pm\sqrt{9d - 5c}$

13

A right circular cylinder has a height of 4 meters (m) and a base with a radius of 18 m. What is the volume, in  $m^3$ , of the cylinder?

- A)  $4\pi$
- B)  $22\pi$
- C)  $288\pi$
- D)  $1296\pi$

14

What is the  $y$ -intercept of the graph of  $3x + 2y = 96$  in the  $xy$ -plane?

- A) (0, 5)
- B) (0, 6)
- C) (0, 32)
- D) (0, 48)

15

- If your answer is a fraction that doesn't fit in the provided space, enter the decimal equivalent.
- If your answer is a decimal that doesn't fit in the provided space, enter it by truncating or rounding at the fourth digit.
- If your answer is a mixed number (such as  $3\frac{1}{2}$ ), enter it as an improper fraction ( $7/2$ ) or its decimal equivalent (3.5).
- Don't enter symbols such as a percent sign, comma, or dollar sign.

Answer	Acceptable ways to enter answer	Unacceptable: will NOT receive credit
	3.5	
3.5	3.50 $\frac{2}{7}$	$31/2$ $3\ 1/2$
	$2/3$	0.66
$\frac{2}{3}$	.6666 .6667 0.666 0.667	.66 0.67 .67
$-\frac{1}{3}$	-1/3 -.3333 -0.333	-.33 -0.33

If  $\frac{6}{7}p + 12 = 54$ , what is the value of  $7p$ ?

Answer :

16

A certain neighborhood had a population of 1340 in 2009. Each year for the next 5 years, the population of the neighborhood increased by approximately 3% of the population the previous year. Which of the following equations represents the population,  $N$ , of the neighborhood  $t$  years after 2009, where  $t \leq 5$ ?

- A)  $N = 0.03(1340)^t$   
 B)  $N = 1340(0.03)^t$   
 C)  $N = 1340(1.03)^t$   
 D)  $N = 1.03(1340)^t$

17

In the  $xy$ -plane, which of the following does NOT contain any points  $(x, y)$  that are solutions to  $7x + 4y > 12$ ?

- A) The region where  $x > 0$  and  $y > 0$   
 B) The region where  $x < 0$  and  $y > 0$   
 C) The region where  $x < 0$  and  $y < 0$   
 D) The region where  $x > 0$  and  $y < 0$

18

- If your answer is a fraction that doesn't fit in the provided space, enter the decimal equivalent.
- If your answer is a decimal that doesn't fit in the provided space, enter it by truncating or rounding at the fourth digit.
- If your answer is a mixed number (such as  $3\frac{1}{2}$ ), enter it as an improper fraction ( $\frac{7}{2}$ ) or its decimal equivalent(3.5).
- Don't enter symbols such as a percent sign, comma, or dollar sign.

Answer	Acceptable ways to enter answer	Unacceptable: will NOT receive credit
	3.5	
3.5	3.50	$\frac{31}{2}$
	$\frac{2}{7}$	$3\frac{1}{2}$
	$\frac{2}{3}$	0.66
$\frac{2}{3}$	.6666	.66
	.6667	0.67
	0.666	.67
	0.667	
$-\frac{1}{3}$	-1/3	-.33
	-.3333	-0.33
	-0.333	

In triangle  $RST$ , the measure of angle  $R$  is 10 degrees and the measure of angle  $T$  is 50 degrees. Point  $L$  lies on  $RS$ , point  $K$  lies on  $ST$ , and  $LK$  is parallel to  $RT$ . What is the measure, in degrees, of angle  $SKL$ ? (Disregard the degree symbol when entering your answer.)

Answer :

19

An auditorium has seats for 3200 people. Tickets to attend a show at the auditorium currently cost \$8.00. For each \$1.00 increase to the ticket price, 100 fewer tickets will be sold. This situation can be modeled by the equation  $y = -100x^2 + 2400x + 25600$ , where  $x$  represents the increase in ticket price, in dollars, and  $y$  represents the revenue, in dollars, from ticket sales. If this equation is graphed in the  $xy$ -plane, at what value of  $x$  is the maximum of the graph?

- A) 8  
B) 12  
C) 24  
D) 32

20

$$(x + 3)^2 + (y - 4)^2 = 25$$

In the  $xy$ -plane, the graph of the given equation is a circle. Which point lies on this circle?

- A)  $(-3, 4)$   
B)  $(3, -4)$   
C)  $(\sqrt{11} + 3, \sqrt{14} - 4)$   
D)  $(\sqrt{11} - 3, \sqrt{14} + 4)$

21

The expression  $\frac{x^{20}(x-4)}{5x^2} + \frac{4x^{20}}{5x^2}$  is equivalent to  $\frac{1}{5}x^c$ , where  $c$  is a constant and  $x > 0$ . What is the value of  $c$ ?

- A) 4
- B) 5
- C) 19
- D) 21

22

- If your answer is a fraction that doesn't fit in the provided space, enter the decimal equivalent.
- If your answer is a decimal that doesn't fit in the provided space, enter it by truncating or rounding at the fourth digit.
- If your answer is a mixed number (such as  $3\frac{1}{2}$ ), enter it as an improper fraction ( $7/2$ ) or its decimal equivalent (3.5).
- Don't enter symbols such as a percent sign, comma, or dollar sign.

Answer	Acceptable ways to enter answer	Unacceptable: will NOT receive credit
	3.5	
3.5	3.50	31/2
	$\frac{2}{7}$	3 1/2
	2/3	0.66
$\frac{2}{3}$	.6666	.66
	.6667	0.67
	0.666	.67
	0.667	
$-\frac{1}{3}$	-1/3	-.33
	-.3333	-0.33
	-0.333	

Triangle  $ABC$  is similar to triangle  $DEF$ , where angle  $A$  corresponds to angle  $D$  and angles  $C$  and  $F$  are right angle. The length of  $AB$  is 2.4 times the length of  $DE$ . If  $\tan A = 21/20$ , what is the value of  $\sin D$ ?

Answer :

# Math

## 27 QUESTIONS

### DIRECTIONS

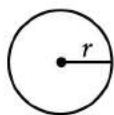
The questions in this section address a number of important math skills. Use of a calculator is permitted for all questions.

### NOTES

Unless otherwise indicated:


- All variables and expressions represent real numbers.
- Figures provided are drawn to scale.
- All figures lie in a plane.
- The domain of a given function  $f$  is the set of all real numbers  $x$  for which  $f(x)$  is a real number.

### REFERENCE

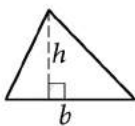


$$A = \pi r^2$$

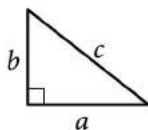
$$C = 2\pi r$$



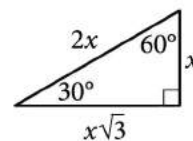
$$A = \ell w$$



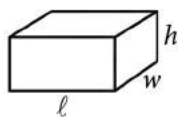
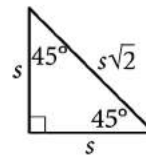
$$A = \frac{1}{2}bh$$



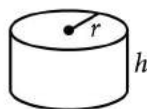
$$c^2 = a^2 + b^2$$



Special Right Triangles



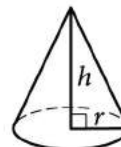
$$V = \ell wh$$



$$V = \pi r^2 h$$



$$V = \frac{4}{3}\pi r^3$$



$$V = \frac{1}{3}\pi r^2 h$$



$$V = \frac{1}{3}\ell wh$$

The number of degrees of arc in a circle is 360.

The number of radians of arc in a circle is  $2\pi$ .

The sum of the measures in degrees of the angles of a triangle is 180.

**For multiple-choice questions**, solve each problem, choose the correct answer from the choices provided, and then circle your answer in this book. Circle only one answer for each question. If you change your mind, completely erase the circle. You will not get credit for questions with more than one answer circled, or for questions with no answers circled.

**For student-produced response questions**, solve each problem and write your answer next to or under the question in the test book as described below.

- Once you've written your answer, circle it clearly. You will not receive credit for anything written outside the circle, or for any questions with more than one circled answer.
- If you find **more than one correct answer**, write and circle only one answer.
- Your answer can be up to 5 characters for a **positive** answer and up to 6 characters (including the negative sign) for a **negative** answer, but no more.
- If your answer is a **fraction** that is too long (over 5 characters for positive, 6 characters for negative), write the decimal equivalent.
- If your answer is a **decimal** that is too long (over 5 characters for positive, 6 characters for negative), truncate it or round at the fourth digit.
- If your answer is a **mixed number** (such as  $3\frac{1}{2}$ ), write it as an improper fraction ( $\frac{7}{2}$ ) or its decimal equivalent (3.5).
- Don't include **symbols** such as a percent sign, comma, or dollar sign in your circled answer.

1

The speed of a white-throated needletail, a type of bird, in flight was measured to be 49 miles per hour. What was the white-throated needletail's measured speed, in kilometers per hour? (Use 1 mile = 1.6 kilometers.)

- A) 30.6
- B) 47.4
- C) 50.6
- D) 78.4

2

Which expression is equivalent to  $(3x^3 - x^2 + 4)(5x^2 + 8x)$ ?

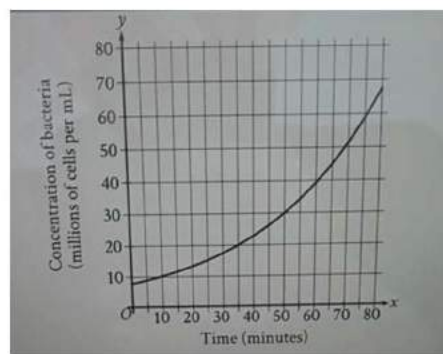
- A)  $15x^5 + 19x^4 - 8x^3 - 20x + 32$
- B)  $15x^5 + 19x^4 - 8x^3 - 20x^2 + 32$
- C)  $15x^5 + 19x^4 - 8x^3 + 20x^2 + 32x$
- D)  $15x^5 + 29x^4 - 8x^3 + 20x^2 + 32x$

3

If  $5(x + 1) = 25$ , what is the value of  $x + 1$ ?

- A) 4
- B) 5
- C) 19
- D) 20

4



The graph shows the estimated concentration of a certain strain of bacteria, in millions of cells per mL of nutrient medium, over time  $x$ , in minutes since the initial measurement. According to the graph, which of the following is closest to the number of minutes it took for the estimated concentration of the bacteria to increase from 20 million cells per mL of nutrient medium to 30 million cells per mL of nutrient medium?

- A) 15
- B) 20
- C) 30
- D) 35

5

If  $(x + 3)^2 = 30$ , what is the value of  $x^2 + 6x$ ?

- A) 21
- B) 30
- C) 39
- D) 60

6

$$\begin{aligned}y &= 5x \\ y &= 2x + 2\end{aligned}$$

How many solutions does the given system of equations have?

- A) Exactly one
- B) Exactly two
- C) Infinitely many
- D) Zero

7

$$f(x) = |71 - 2x|$$

The function  $f$  is defined by the given equation. For which of the following values of  $k$  does  $f(k) = 3k$ ?

- A)  $71/5$
- B)  $71/2$
- C)  $213/5$
- D) 71

8

$$g(x) = 2(16x - 17)$$

What is the  $y$ -coordinate of the  $y$ -intercept of the graph of  $y = g(x) - 3$  in the  $xy$ -plane?

- A) -37
- B) -34
- C) -20
- D) -17

9

- If your answer is a fraction that doesn't fit in the provided space, enter the decimal equivalent.
- If your answer is a decimal that doesn't fit in the provided space, enter it by truncating or rounding at the fourth digit.
- If your answer is a mixed number (such as  $3\frac{1}{2}$ ), enter it as an improper fraction ( $7/2$ ) or its decimal equivalent(3.5).
- Don't enter symbols such as a percent sign, comma, or dollar sign.

Answer	Acceptable ways to enter answer	Unacceptable: will NOT receive credit
3.5	3.5	
	3.50	31/2
	$\frac{2}{7}$	3 1/2
$\frac{2}{3}$	2/3	0.66
	.6666	.66
	.6667	0.67
	0.666	.67
	0.667	
$-\frac{1}{3}$	-1/3	-.33
	-.3333	-0.33
	-0.333	

$x$	$y$
0	$n$
4	$n + 19$
8	$n + 38$

There is a linear relationship between  $x$  and  $y$ . The table shows three values of  $x$  and their corresponding values of  $y$  in terms of a constant  $n$ . What is the slope of the line that represents this relationship in the  $xy$ -plane?

Answer:

10

- If your answer is a fraction that doesn't fit in the provided space, enter the decimal equivalent.
- If your answer is a decimal that doesn't fit in the provided space, enter it by truncating or rounding at the fourth digit.
- If your answer is a mixed number (such as  $3\frac{1}{2}$ ), enter it as an improper fraction ( $7/2$ ) or its decimal equivalent(3.5).
- Don't enter symbols such as a percent sign, comma, or dollar sign.

Answer	Acceptable ways to enter answer	Unacceptable: will NOT receive credit
3.5	3.5	
	3.50	31/2
	$\frac{2}{7}$	3 1/2
$\frac{2}{3}$	2/3	0.66
	.6666	.66
	.6667	0.67
	0.666	.67
	0.667	
$-\frac{1}{3}$	-1/3	-.33
	-.3333	-0.33
	-0.333	

$$18x^2 + 24x + c = 0$$

In the given equation,  $c$  is a constant. The equation has exactly one solution. What is the value of  $c$ ?

Answer:

11

- If your answer is a fraction that doesn't fit in the provided space, enter the decimal equivalent.
- If your answer is a decimal that doesn't fit in the provided space, enter it by truncating or rounding at the fourth digit.
- If your answer is a mixed number (such as  $3\frac{1}{2}$ ), enter it as an improper fraction ( $7/2$ ) or its decimal equivalent (3.5).
- Don't enter symbols such as a percent sign, comma, or dollar sign.

Answer	Acceptable ways to enter answer	Unacceptable: will NOT receive credit
3.5	3.5	
	3.50	31/2
	$\frac{2}{7}$	3 1/2
$\frac{2}{3}$	2/3	0.66
	.6666	.66
	.6667	0.67
	0.666	.67
	0.667	
$-\frac{1}{3}$	-1/3	-.33
	-.3333	-0.33
	-0.333	

$$(x - 3) - 8(y + 9) = 129$$

$$(x - 3) + 8(y + 9) = 432$$

The solution to the given system of equations is  $(x, y)$ . What is the value of  $8(x - 3)$ ?

Answer:

12

The volume of a right rectangular prism with a square base is 2448 cubic centimeters. If the area of the square base is 144 square centimeters, what is the area, in square centimeters, of one of the four lateral faces of the prism?

- A) 17
- B) 204
- C) 540
- D) 816

13

$$y = 5(x - 2)^2$$

$$y = 10(x - 2)$$

A solution to the given system of equations is  $(x, y)$ . What is one possible value of  $x + y$ ?

- A) -20
- B) 4
- C) 20
- D) 24

14

- If your answer is a fraction that doesn't fit in the provided space, enter the decimal equivalent.
- If your answer is a decimal that doesn't fit in the provided space, enter it by truncating or rounding at the fourth digit.
- If your answer is a mixed number (such as  $3\frac{1}{2}$ ), enter it as an improper fraction ( $7/2$ ) or its decimal equivalent(3.5).
- Don't enter symbols such as a percent sign, comma, or dollar sign.

Answer	Acceptable ways to enter answer	Unacceptable: will NOT receive credit
3.5	3.5	
	3.50	31/2
	$\frac{2}{7}$	3 1/2
$\frac{2}{3}$	2/3	0.66
	.6666	.66
	.6667	0.67
	0.666	.67
	0.667	
$-\frac{1}{3}$	-1/3	-.33
	-.3333	-0.33
	-0.333	

The graph of the quadratic function  $y = f(x)$  in the  $xy$ -plane intersects the  $x$ -axis when  $x = 39$  and when  $x = p$ , where  $p$  is a constant. The maximum value of  $y = f(x)$  occurs at the point  $(14, m)$ , where  $m$  is a constant. What is the value of  $p$ ?

Answer:

15

- If your answer is a fraction that doesn't fit in the provided space, enter the decimal equivalent.
- If your answer is a decimal that doesn't fit in the provided space, enter it by truncating or rounding at the fourth digit.
- If your answer is a mixed number (such as  $3\frac{1}{2}$ ), enter it as an improper fraction ( $7/2$ ) or its decimal equivalent(3.5).
- Don't enter symbols such as a percent sign, comma, or dollar sign.

Answer	Acceptable ways to enter answer	Unacceptable: will NOT receive credit
3.5	3.5	
	3.50	31/2
	$\frac{2}{7}$	3 1/2
$\frac{2}{3}$	2/3	0.66
	.6666	.66
	.6667	0.67
	0.666	.67
	0.667	
$-\frac{1}{3}$	-1/3	-.33
	-.3333	-0.33
	-0.333	

$$\frac{x+1}{5x^2} = \frac{k}{x}$$

In the given equation,  $k$  is a constant. The solution to the given equation is  $1/174$ . What is the value of  $k$ ?

Answer:

16

- If your answer is a fraction that doesn't fit in the provided space, enter the decimal equivalent.
- If your answer is a decimal that doesn't fit in the provided space, enter it by truncating or rounding at the fourth digit.
- If your answer is a mixed number (such as  $3\frac{1}{2}$ ), enter it as an improper fraction ( $7/2$ ) or its decimal equivalent ( $3.5$ ).
- Don't enter symbols such as a percent sign, comma, or dollar sign.

Answer	Acceptable ways to enter answer	Unacceptable: will NOT receive credit
3.5	3.5	
	$\frac{2}{7}$	$31/2$ $3\ 1/2$
	$\frac{2}{3}$	0.66
$\frac{2}{3}$	.6666	.66
	.6667	0.67
	0.666	.67
	0.667	
$-\frac{1}{3}$	-1/3	-.33
	-.3333	-0.33
	-0.333	

The area of a triangle is equal to  $x^2$  square centimeters. The length of the base of the triangle is  $2x + 6$  centimeters, and the height of the triangle is  $x - 2$  centimeters. What is the value of  $x$ ?

Answer:

17

The function  $g$  is a quadratic function. In the  $xy$ -plane, the graph of  $y = g(x)$  has a vertex at  $(-1, -4)$  and passes through the points  $(-2, -43)$  and  $(1, -160)$ . What is the value of  $g(0) - g(2)$ ?

- A) -121  
B) 0  
C) 117  
D) 312

18

Triangles  $ABC$  and  $DEF$  are congruent, where  $A$  corresponds to  $D$ , and  $B$  and  $E$  are right angles. The measure of angle  $A$  is  $62^\circ$ . What is the measure of angle  $F$ ?

- A)  $28^\circ$   
B)  $62^\circ$   
C)  $90^\circ$   
D)  $118^\circ$

19

A business consultant charges \$408 for the first hour and \$204 for each additional hour of work. Which of the following functions gives the charge  $C(h)$ , in dollars, for  $h$  hours of work, where  $h$  is a positive integer?

- A)  $C(h) = 204h + 204$   
B)  $C(h) = 204h + 408$   
C)  $C(h) = 408h + 204$   
D)  $C(h) = 408h + 612$

20

An acceptable noise criterion rating for the background noise in a laundry room is 50. For a noise criterion rating of 50, the equation  $y = 22(0.997)^{x-60} + 47$  gives the estimated sound pressure level,  $y$ , in decibels, as a function of the octave band center frequency,  $x$ , in hertz, where  $x \geq 60$ . Which of the following is the best interpretation of 47 in this context?

- A) 47 is 22 less than the estimated sound pressure level, in decibels, at an octave band center frequency of 60 hertz.
- B) 47 is 22 less than the estimated sound pressure level, in decibels, at an octave band center frequency of 0 hertz.
- C) 47 is the estimated sound pressure level, in decibels, at an octave band center frequency of 60 hertz.
- D) 47 is the estimated sound pressure level, in decibels, at an octave band center frequency of 0 hertz.

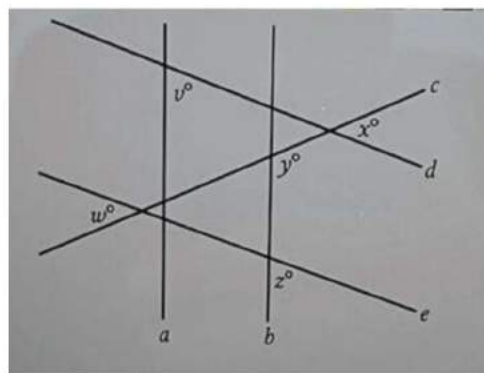
21

$$\begin{aligned} 3x + 5y &= 8 \\ 9x + 15y &= 24 \end{aligned}$$

For each real number  $r$ , which of the following points lies on the graph of each equation in the  $xy$ -plane for the given system?

- A)  $(r, -\frac{5r}{3} + \frac{8}{3})$
- B)  $(r, \frac{3r}{5} + \frac{8}{5})$
- C)  $(-\frac{5r}{3} + \frac{8}{3}, r)$
- D)  $(\frac{r}{3} + 8, -\frac{r}{3} + 24)$

22



Note: Figure not drawn to scale.

In the figure, parallel lines  $a$  and  $b$  are intersected by lines  $c$ ,  $d$ , and  $e$ . If  $z = 49$ ,  $y = 136$ , and  $v < z$ , which statement about  $x$  and  $w$  must be true?

- A)  $x < w$
- B)  $x > w$
- C)  $x = w$
- D)  $x + w = 90$

Math 1	Math 2
B	D
D	C
A	B
A	A
40	A
D	A
D	A
A	A
-19	$19/4$
$1/3$	8
$21/250$	2244
D	B
D	D
D	-11
343	35
C	6
C	D
50	A
B	A
D	A
C	C
$21/29$	B